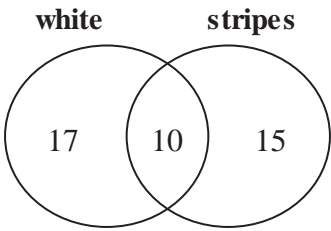




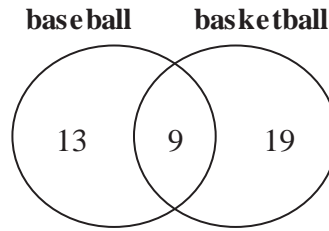
Use each Venn diagram to answer the questions.

Socks



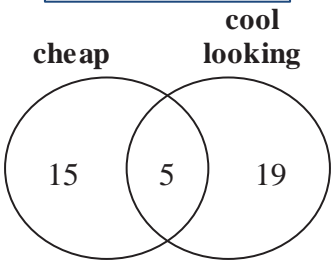
- 1) How many socks were white with stripes?
- 2) How many socks were white?
- 3) How many socks had stripes but were not white?
- 4) How many socks were either white or had stripes, but not both?
- 5) How many socks had stripes?

Sports



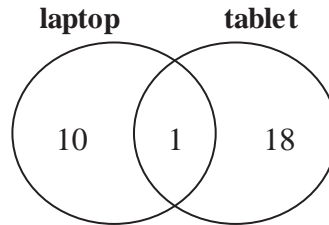
- 6) How many people like baseball?
- 7) How many people like both baseball and basketball?
- 8) How many people did not like both baseball and basketball?
- 9) How many people like only basketball?
- 10) How many people like only baseball?

Sunglasses



- 11) How many sunglasses were cool looking, but not cheap?
- 12) How many sunglasses were cheap?
- 13) How many sunglasses were either cheap or cool looking, but not both?
- 14) How many sunglasses were cheap, but not cool looking?
- 15) How many sunglasses were cool looking?

Computers



- 16) How many people owned a laptop?
- 17) How many people owned only a laptop?
- 18) How many people owned both a laptop and a tablet?
- 19) How many people owned only a tablet?
- 20) How many people did not have both a laptop and a tablet?

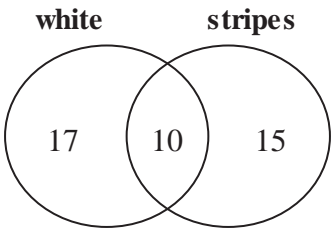
Answers

1. _____
2. _____
3. _____
4. _____
5. _____
6. _____
7. _____
8. _____
9. _____
10. _____
11. _____
12. _____
13. _____
14. _____
15. _____
16. _____
17. _____
18. _____
19. _____
20. _____



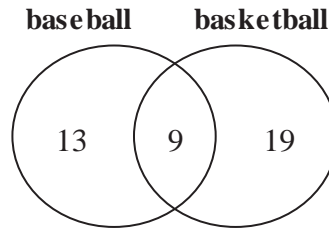
Use each Venn diagram to answer the questions.

Socks



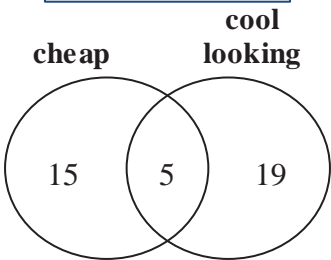
- 1) How many socks were white with stripes?
- 2) How many socks were white?
- 3) How many socks had stripes but were not white?
- 4) How many socks were either white or had stripes, but not both?
- 5) How many socks had stripes?

Sports



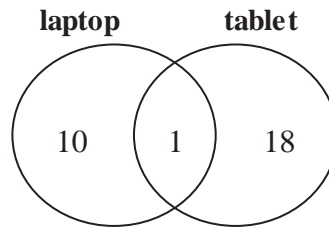
- 6) How many people like baseball?
- 7) How many people like both baseball and basketball?
- 8) How many people did not like both baseball and basketball?
- 9) How many people like only basketball?
- 10) How many people like only baseball?

Sunglasses



- 11) How many sunglasses were cool looking, but not cheap?
- 12) How many sunglasses were cheap?
- 13) How many sunglasses were either cheap or cool looking, but not both?
- 14) How many sunglasses were cheap, but not cool looking?
- 15) How many sunglasses were cool looking?

Computers



- 16) How many people owned a laptop?
- 17) How many people owned only a laptop?
- 18) How many people owned both a laptop and a tablet?
- 19) How many people owned only a tablet?
- 20) How many people did not have both a laptop and a tablet?

Answers

1. 10
2. 27
3. 15
4. 32
5. 25
6. 22
7. 9
8. 32
9. 19
10. 13
11. 19
12. 20
13. 34
14. 15
15. 24
16. 11
17. 10
18. 1
19. 18
20. 28